

## Today's Plan:

**Learning Target (standard):** I will solve multi-step inequalities. I will write their solutions as sets and intervals. I will graph the solutions on a number line.

**Students will:** Complete practice problems over previous concepts at the boards, put up homework problems on the board and make necessary corrections to their own work, take notes over new material and complete practice problems over new concepts.


**Teacher will:** Provide practice problems over previous concepts, check homework problems for accuracy and provide students feedback, describe and provide examples of new concepts and assign students assessment problems over new concepts.

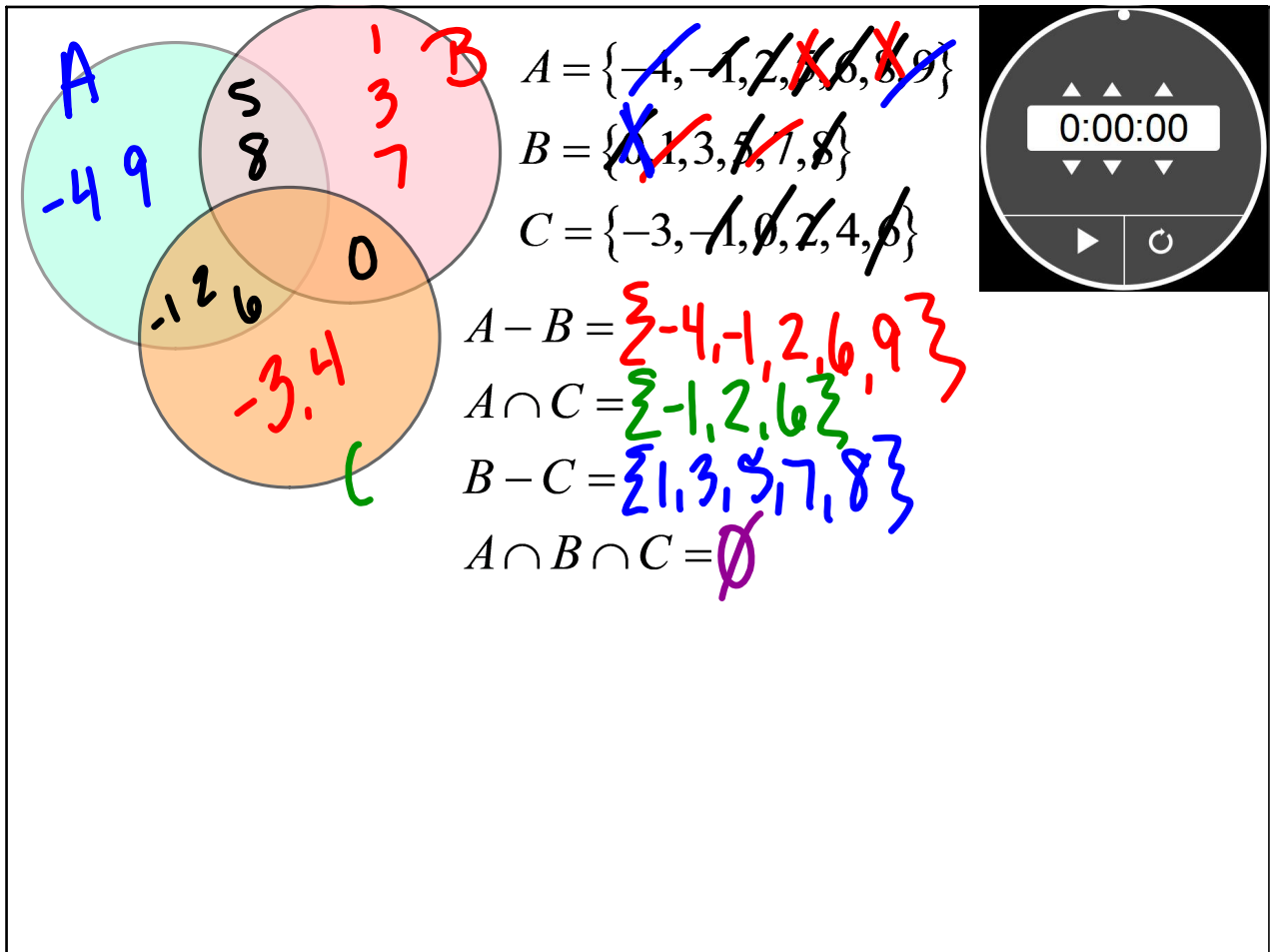
**Assessment:** Board work, homework check and homework assignment

**Differentiation:** Students will work at the board, go over and correct homework at their seats, actively engage in lecture over new concepts, practice new concepts with the aid of other students and the teacher and complete homework assignment.

Inequality Solutions: \* Copy into your notes before class begins! \*

- if an inequality results in a **false** statement without variables, the inequality does not have a solution and it is written as **the empty set**  $\emptyset$  "no solution - inconsistent"  
 $3 < -2$
- if an inequality results in a **true** statement without variables, the inequality has ALL solutions and it is written as **the set of real numbers**  $\mathbb{R}$  "identity - infinite solutions - dependent"  
 $-4 \leq 5$





Solve the inequality. Write the solution as a set and in interval notation.

$$5) 90 \geq 3(8 - 4r) + r$$

$$90 \geq 24 - 12r + r$$

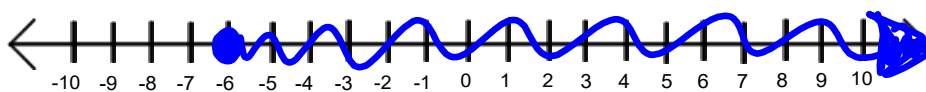
$$90 \geq 24 - 11r$$

$$11r + 90 \geq 24$$

$$11r \geq -66$$

$$r \geq -6$$

$$\{r \mid r \geq -6\}$$



$$[-6, \infty)$$

Solve the inequality. Write the solution as a set and in interval notation.

$$12) -38 \geq -3(x-6) + 5(3x-4)$$

$$-38 \geq -3x + 18 + 15x - 20$$

$$-38 \geq 12x - 2$$

$$-12x - 38 \geq -2$$

$$-12x \geq 36$$

$$x \leq -3$$

$$\{x | x \leq -3\}$$



$$(-\infty, -3]$$

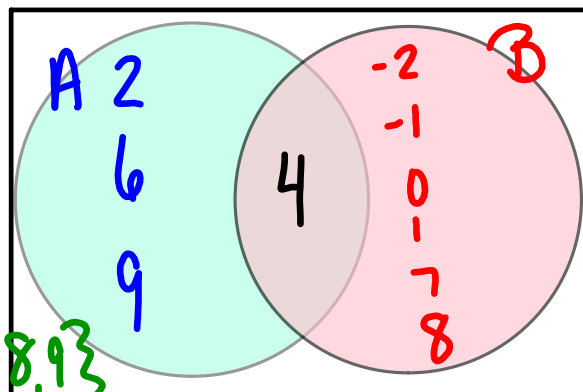
$$A = \{2, \cancel{4}, 6, 9\}$$

$$B = \{-2, -1, 0, 1, \cancel{4}, 7, 8\}$$

Find:

$$A \cup B = \{-2, -1, 0, 2, 4, 6, 7, 8, 9\}$$

$$A \cap B = \{4\}$$



## Venn Diagrams:

$$A = \{\cancel{-3}, \cancel{-1}, \cancel{0}, 2, 4, \cancel{6}, 7\}$$

$$B = \{\cancel{1}, \cancel{2}, \cancel{3}, \cancel{4}, \cancel{5}, \cancel{6}\}$$

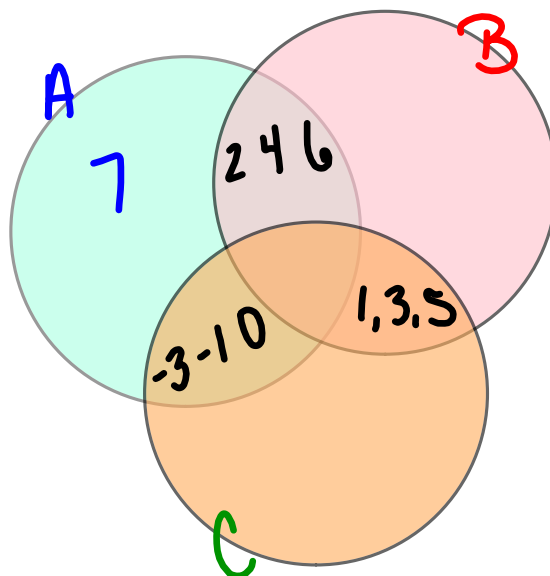
$$C = \{\cancel{-3}, \cancel{-1}, \cancel{0}, \cancel{1}, \cancel{3}, \cancel{5}\}$$

$$A - C = \{2, 4, 6, 7\}$$

$$A \cap C = \{-3, -1, 0\}$$

$$B - C = \{2, 4, 6\}$$

$$B \cap C = \{1, 3, 5\}$$



Solve the inequality. Write the solution as a set and an interval.

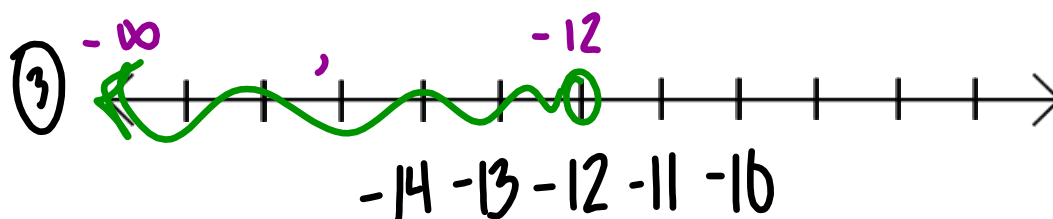
$$4r - 5 > 5r + 7 \quad \textcircled{2} \{r \mid r < -12\}$$

$$\textcircled{1} -r - 5 > 7$$

$$-r > 12$$


$$r < -12$$

$$\textcircled{4} (-\infty, -12)$$



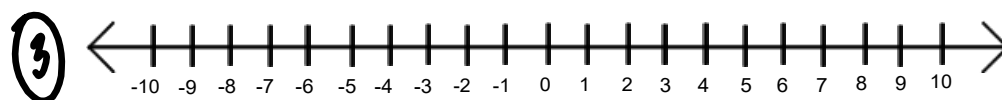
Solve the inequality. Write the solution as a set and an interval.

$$\begin{aligned} \textcircled{1} \quad \frac{x}{2} - 4 &> -6 && x > -4 \\ &+4 \quad +4 && \textcircled{2} \{x \mid x > -4\} \\ &2 \left[ \frac{x}{2} > -2 \right] && \textcircled{4} (-4, \infty) \end{aligned}$$



Solve the inequality. Write the solution as a set and an interval.

$$\begin{aligned} 7a &< 3 + 7(a - 1) && \textcircled{2} \emptyset \\ \textcircled{1} \quad 7a &< 3 + 7a - 7 && \textcircled{4} - \\ 7a &< 7a - 4 && \\ 0 &< -4 && \end{aligned}$$

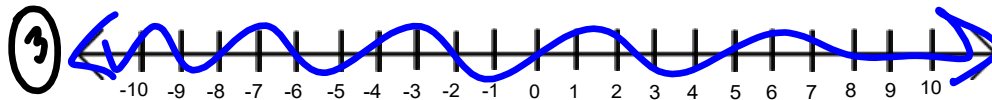


Solve the inequality. Write the solution as a set and an interval.

$$-5(x+3) < -5x+1 \quad \textcircled{2} \mathbb{R}$$

$$\textcircled{1} \begin{aligned} -5x-15 &< -5x+1 \\ -15 &< 1 \end{aligned}$$

$$\textcircled{4} (-\infty, \infty)$$



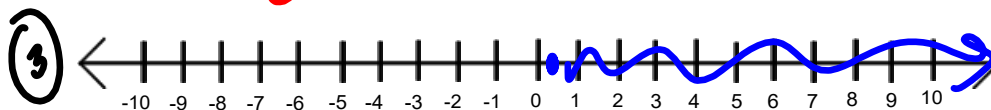
Solve the inequality. Write the solution as a set and an interval.

$$\textcircled{1} \left[ \frac{5}{6}r + 1 \geq \frac{4}{3} \right]$$

$$\textcircled{2} \{r \mid r \geq \frac{2}{3}\}$$

$$\begin{aligned} 5r+6 &\geq 8 \\ 5r &\geq 2 \\ r &\geq \frac{2}{5} \end{aligned}$$

$$\textcircled{4} \left[ \frac{2}{3}, \infty \right)$$



# Assignment:

## Multi-Step Inequalities 2

- Solve #1-14
- Set notation
- Graph
- Interval notation