

## Today's Plan:

**Learning Target (standard):** I will evaluate functions and use correct function notation. I will describe the domain and range of a function.

**Students will:** Complete practice problems over previous concepts at the boards, put up homework problems on the board and make necessary corrections to their own work, take notes over new material and complete practice problems over new concepts.

**Teacher will:** Provide practice problems over previous concepts, check homework problems for accuracy and provide students feedback, describe and provide examples of new concepts and assign students assessment problems over new concepts.

**Assessment:** Board work, homework check and homework assignment

**Differentiation:** Students will work at the board, go over and correct homework at their seats, actively engage in lecture over new concepts, practice new concepts with the aid of other students and the teacher and complete homework assignment.

### p.117 #36-64(by 4)

36a) yes

b)  $f(4) = 4; (4, 4)$

c)  $(-2, 1)$

d)  $D: \{x \mid x \neq 2\}$

40a)  $D: \left\{x \mid -\frac{\pi}{2} < x < \frac{\pi}{2}\right\}; R: \mathbb{R}$

b)  $I_x: (0, 0); I_y: (0, 0)$

c) origin

44a)  $D: \{x \mid 0 \leq x \leq 4\}; R: \{y \mid 0 \leq y \leq 3\}$

b)  $I_x: (0, 0); I_y: (0, 0)$

c) none

48a)  $D: \{x \mid x \neq -1\}; R: \{y \mid y > 0\}$

b)  $I_x: -; I_y: (0, 2)$

c) none

52)  $D: \mathbb{R}$

56)  $D: \{x \mid x \neq -2, 0, 2\}$

60)  $D: \{x \mid x > 4\}$

64a) II

b) V

c) IV

d) III

e) I

Find the domain of the given function:

$$f(x) = \frac{3-x}{x^2-6x-7}$$

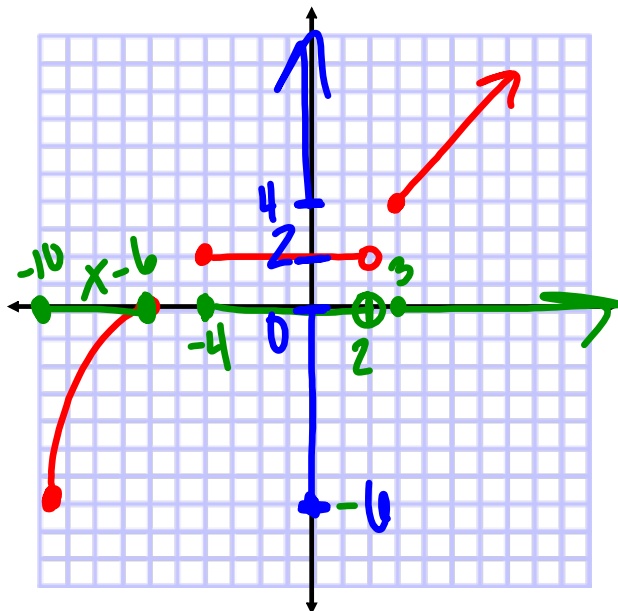
$$x^2 - 6x - 7 = 0$$

$$(x-7)(x+1) = 0$$

$$x = 7, -1$$

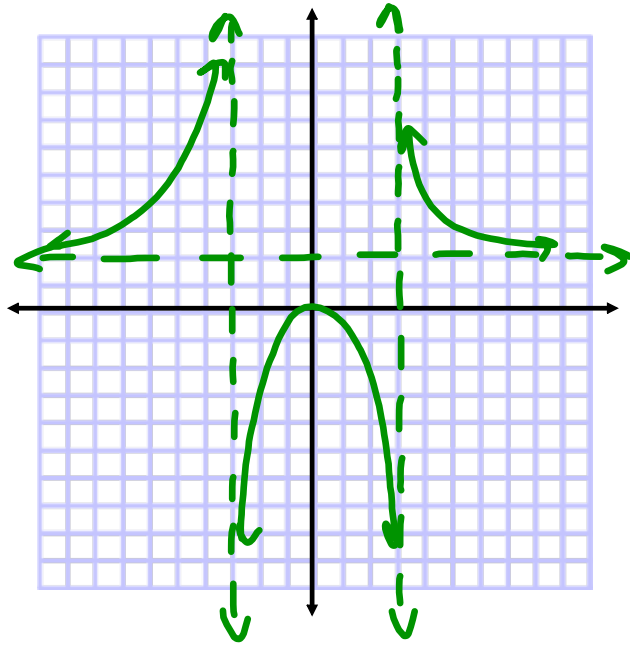
exclusions:  $x = -1, 7$

$$D: \{x \mid x \neq -1, 7\}$$



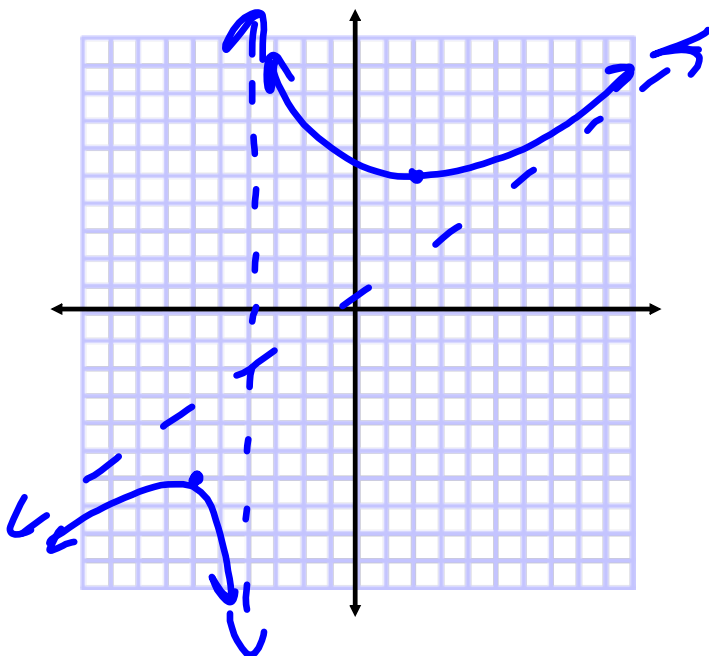
$$D: \{x \mid -10 \leq x \leq -6, -4 \leq x < 2, x \geq 3\}$$

$$R: \{y \mid -6 \leq y \leq 0, y = 2, y \geq 4\}$$



$$D: \{x \mid x \neq -3, 3\}$$

$$R: \{y \mid y \leq 0, y > 2\}$$



$$D: \{x \mid x \neq -4\}$$

$$R: \{y \mid y \leq -6, y \geq 5\}$$

Find the domain of the given function:

$$f(x) = \frac{3-x}{\sqrt{x+5}}$$

$$\begin{aligned} x+5 &\leq 0 \\ x &\leq -5 \end{aligned}$$

exclusions:  $\{x \mid x \leq -5\}$

D:  $\{x \mid x > -5\}$

Given the functions, find the composite functions:

$$f(x) = x^2 + 2x + 3$$

$$g(x) = x + 1$$

$$\begin{aligned} f \circ g &= f(g(x)) = (x+1)^2 + 2(x+1) + 3 \\ &= (x+1)(x+1) + 2x + 2 + 3 \\ &= x^2 + 2x + 1 + 2x + 5 \end{aligned}$$

$$f \circ g = x^2 + 4x + 6$$

Given the functions, find the composite functions:

$$f(x) = x^2 + 2x + 3$$

$$g(x) = x + 1$$

$$g \circ f = g(f(x)) = (x^2 + 2x + 3) + 1$$

$$g \circ f = x^2 + 2x + 4$$

Assignment:

p.117 #34,38,46,50,54,58,62

\* When completing assignments out of the textbook, write the problem and/or draw the provided graph & show work as modeled in class examples \*