

Today's Plan:

Learning Target (standard): I will graph the trigonometric functions using transformations.



Students will: Complete practice problems over previous concepts at the boards, put up homework problems on the board and make necessary corrections to their own work, take notes over new material and complete practice problems over new concepts.

Teacher will: Provide practice problems over previous concepts, check homework problems for accuracy and provide students feedback, describe and provide examples of new concepts and assign students assessment problems over new concepts.

Assessment: Board work, homework check and homework assignment

Differentiation: Students will work at the board, go over and correct homework at their seats, actively engage in lecture over new concepts, practice new concepts with the aid of other students and the teacher and complete homework assignment.

Take a few minutes to go over your graphs with someone near you! If you have questions, do not hesitate to ask!



Practice - Write the transformations:

$$y = 4 \cot\left(\frac{3}{\pi}x + \frac{1}{2}\right) - 5$$

parent: $y = \cot x$ amp = -

p.s. = -

1) $y = 4 \cot x$ v.s. by 4

2) $y = 4 \cot\left(\frac{3}{\pi}x\right)$ h.s. by $\pi/3$ p = $\pi^2/3$

3) $y = 4 \cot\left(\frac{3}{\pi}\left(x + \frac{\pi}{6}\right)\right)$ shift left $\pi/6$ p.s. = $-\pi/6$

4) $y = 4 \cot\left(\frac{3}{\pi}\left(x + \frac{\pi}{6}\right)\right) - 5$ shift down 5

Practice - Graph using transformations:

$$y = -\frac{1}{2} \tan\left(x - \frac{\pi}{4}\right)$$

parent:
 $y = \tan x$ amp = -
 p = π
 p.s. = -

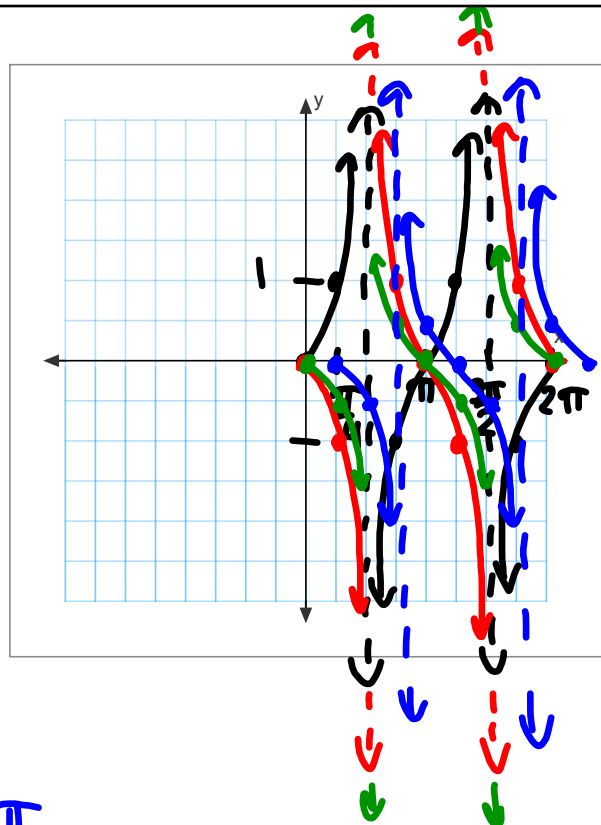
1) $y = -\tan x$ r_x

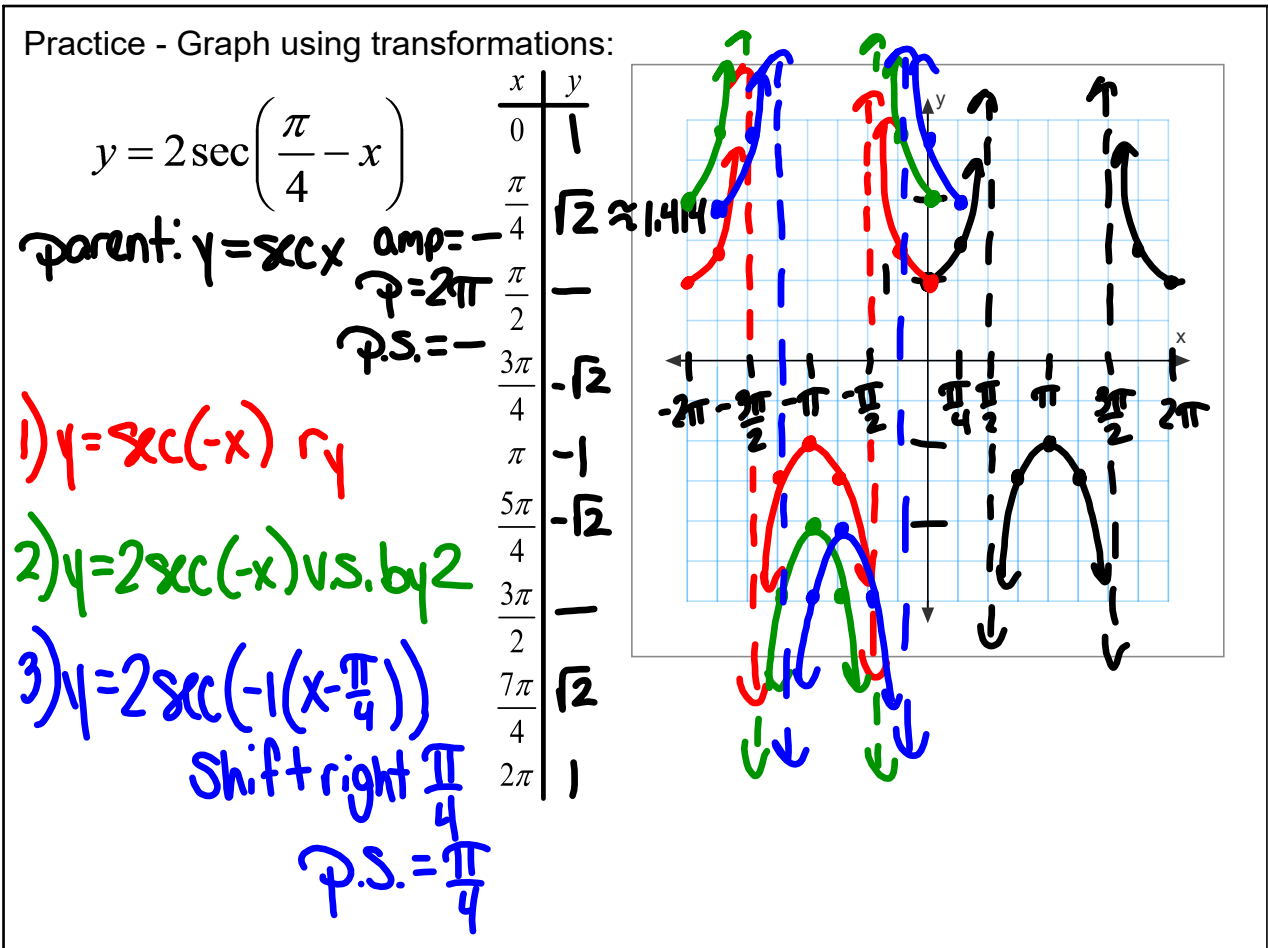
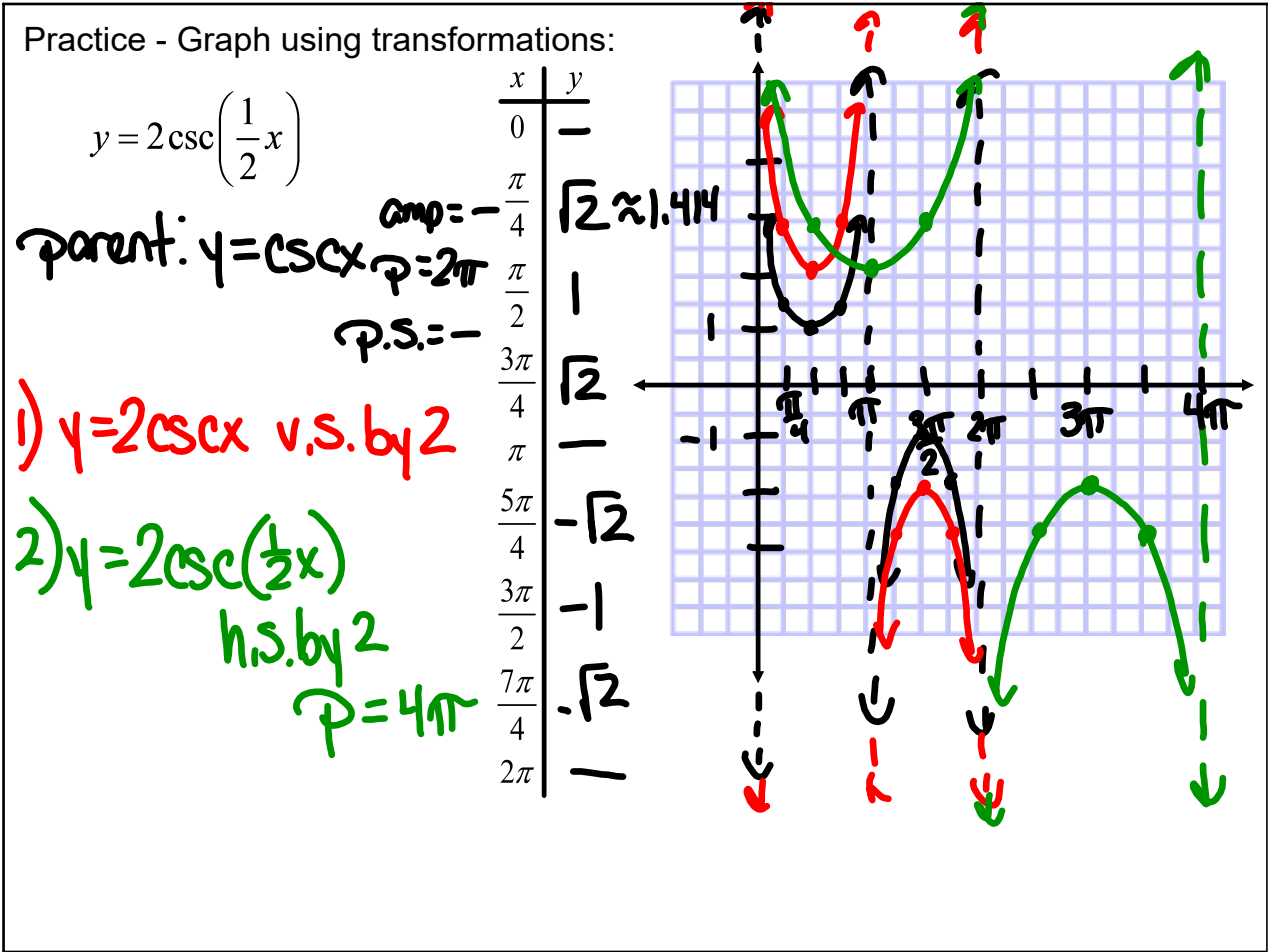
2) $y = -\frac{1}{2} \tan x$ v.c. by $\frac{1}{2}$

3) $y = -\frac{1}{2} \tan\left(x - \frac{\pi}{4}\right)$

Shift right $\frac{\pi}{4}$ p.s. = $\frac{\pi}{4}$

x	y
0	0
$\frac{\pi}{4}$	-1
$\frac{\pi}{2}$	-
$\frac{3\pi}{4}$	-1
π	0
$\frac{5\pi}{4}$	-1
$\frac{3\pi}{2}$	-
$\frac{7\pi}{4}$	-1
2π	0





Practice - Graph using transformations:

$$y = -2 \sin\left(x - \frac{\pi}{2}\right) + 2$$

x	y
0	0
$\frac{\pi}{2}$	$\frac{\sqrt{2}}{2} \approx 0.707$
$\frac{\pi}{4}$	1
$\frac{3\pi}{4}$	$\frac{\sqrt{2}}{2}$
π	0
$\frac{5\pi}{4}$	$-\frac{\sqrt{2}}{2}$
$\frac{3\pi}{2}$	-1
$\frac{7\pi}{4}$	$-\frac{\sqrt{2}}{2}$
2π	0

parent: $y = \sin x$ amp=1
 $p = 2\pi$
 $p.s. = -$

1) $y = -\sin x$ r x

2) $y = -2\sin x$ v.s. by 2
 amp=2

3) $y = -2\sin\left(x - \frac{\pi}{2}\right)$
 shift right $\frac{\pi}{2}$
 $p.s. = \frac{\pi}{2}$

4) $y = -2\sin\left(x - \frac{\pi}{2}\right) + 2$ shift up 2

Graph using transformations:

$$y = \frac{1}{2} \cot(2x + \pi)$$

x	y
0	-
$\frac{\pi}{4}$	-1
$\frac{\pi}{2}$	0
$\frac{3\pi}{4}$	-1
π	-
$\frac{5\pi}{4}$	1
$\frac{3\pi}{2}$	0
$\frac{7\pi}{4}$	-1
2π	-

parent: $y = \cot x$ amp=-
 $p = \pi$
 $p.s. = -$

1) $y = \frac{1}{2} \cot x$ v.c. by $\frac{1}{2}$

2) $y = \frac{1}{2} \cot(2x)$
 h.c. by $\frac{1}{2}$
 $p = \frac{\pi}{2}$

3) $y = \frac{1}{2} \cot\left(2\left(x + \frac{\pi}{2}\right)\right)$
 shift left $\frac{\pi}{2}$ $p.s. = -\frac{\pi}{2}$

Graph using transformations:

x	y
0	1
$\frac{\pi}{2}$	$\frac{\sqrt{2}}{2}x$
π	0
$\frac{3\pi}{2}$	$-\frac{\sqrt{2}}{2}x$
2π	1

$y = 3 \cos\left(-\frac{1}{2}x\right) + 1$
 parent: $y = \cos x$ amp=1 p=2π
 P.S. = $-\frac{3\pi}{4}$
 1) $y = \cos(-x)$ r_y
 2) $y = 3 \cos(-x)$ v.s. by 3 amp=3
 3) $y = 3 \cos(-\frac{1}{2}x)$ h.s. by 2 p=4π
 4) $y = 3 \cos(-\frac{1}{2}x) + 1$ shift up 1

Graph using Transformations. Please label ALL properties and when they change.

1) $y = -1 + 2 \tan\left(\frac{1}{2}x\right)$

2) $y = 3 - \frac{1}{2} \csc(4x + \pi)$

3) $y = 2 - 3 \sin(-x + 2\pi)$

4) $y = -2 + \frac{1}{3} \sec\left(\frac{1}{2}x + \frac{\pi}{4}\right)$

5) $y = 1 - 4 \cos(-2x - \pi)$