

Today's Plan:

Learning Target (standard): I will find trigonometric values of angles in a right triangle.

Students will: Complete practice problems over previous concepts at the boards, put up homework problems on the board and make necessary corrections to their own work, take notes over new material and complete practice problems over new concepts.

Teacher will: Provide practice problems over previous concepts, check homework problems for accuracy and provide students feedback, describe and provide examples of new concepts and assign students assessment problems over new concepts.

Assessment: Board work, homework check and homework assignment

Differentiation: Students will work at the board, go over and correct homework at their seats, actively engage in lecture over new concepts, practice new concepts with the aid of other students and the teacher and complete homework assignment.

Solve.

$$4^{x-x^2} = \frac{1}{2}$$

$$(2^2)^{x-x^2} = 2^{-1}$$

$$2^{2x-2x^2} = 2^{-1}$$

$$-2x^2 + 2x = -1$$

$$0 = 2x^2 - 2x - 1$$

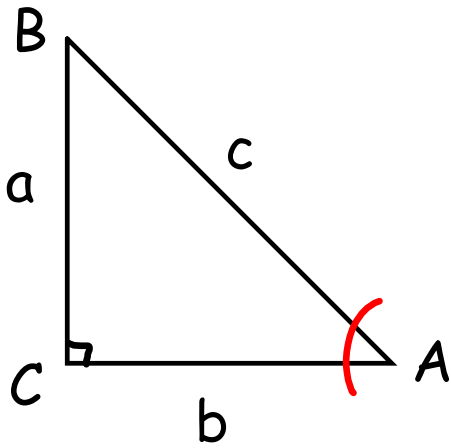
$$x = \frac{-b \pm \sqrt{b^2 - 4ac}}{2a}$$

$$= \frac{2 \pm \sqrt{4 - 4(2)(-1)}}{2(2)}$$

$$= \frac{2 \pm \sqrt{12}}{4}$$

$$= \frac{2 \pm 2\sqrt{3}}{4}$$

$$x = \frac{1 + \sqrt{3}}{2}, \frac{1 - \sqrt{3}}{2}$$



$$\sin A = \frac{\text{opp}}{\text{hyp}} = \frac{a}{c}$$

$$\cos A = \frac{\text{adj}}{\text{hyp}} = \frac{b}{c}$$

$$\tan A = \frac{\text{opp}}{\text{adj}} = \frac{a}{b}$$

Find the value of the trig function indicated. Show ALL steps!



$$\begin{aligned} x^2 + 7^2 &= 25^2 \\ x^2 + 49 &= 625 \\ \sqrt{x^2} &= \sqrt{576} \\ x &= 24, -24 \end{aligned}$$

$$\begin{aligned} \sin \theta &= \frac{\text{opp}}{\text{hyp}} \\ \cos \theta &= \frac{\text{adj}}{\text{hyp}} \\ \tan \theta &= \frac{\text{opp}}{\text{adj}} \end{aligned}$$

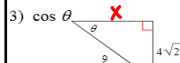
$$\tan \theta = \frac{7}{24}$$



$$\begin{aligned} 9^2 + (6\sqrt{10})^2 &= x^2 \\ 81 + 360 &= x^2 \\ \sqrt{x^2} &= \sqrt{441} \\ x &= 21, -21 \end{aligned}$$

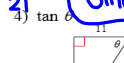
$$\sin \theta = \frac{6\sqrt{10}}{21}$$

$$\sin \theta = \frac{2\sqrt{10}}{7}$$



$$\begin{aligned} x^2 + (4\sqrt{2})^2 &= 9^2 \\ x^2 + 32 &= 81 \\ \sqrt{x^2} &= \sqrt{49} \\ x &= 7, -7 \end{aligned}$$

$$\cos \theta = \frac{7}{9}$$

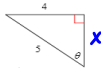


$$\begin{aligned} x^2 + 11^2 &= 22^2 \\ x^2 + 121 &= 484 \\ \sqrt{x^2} &= \sqrt{363} \\ x &= 11\sqrt{3}, -11\sqrt{3} \end{aligned}$$

$$\tan \theta = \frac{11\sqrt{3}}{11}$$

$$\tan \theta = \sqrt{3}$$

5) $\cos \theta$



$$x^2 + 4^2 = 5^2$$


$$x^2 + 16 = 25$$

$$\sqrt{x^2} = \sqrt{9}$$

$$x = 3, -3$$

$$\cos \theta = \frac{3}{5}$$

6) $\sin \theta$



$$x^2 + (4\sqrt{21})^2 = 25^2$$

$$x^2 + 336 = 625$$

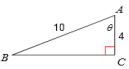
$$\sqrt{x^2} = \sqrt{289}$$

$$x = 17, -17$$

$$\sin \theta = \frac{17}{25}$$

Find the measure of each angle indicated. Round to the nearest tenth.

7)

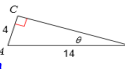


$$\cos \theta = \frac{4}{10}$$

$$\cos^{-1}\left(\frac{4}{10}\right) = \theta$$

$$\theta = 66.4^\circ$$

8)

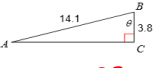


$$\sin \theta = \frac{4}{14}$$

$$\sin^{-1}\left(\frac{4}{14}\right) = \theta$$

$$\theta = 16.6^\circ$$

9)

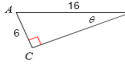


$$\cos \theta = \frac{3.8}{14.1}$$

$$\cos^{-1}\left(\frac{3.8}{14.1}\right) = \theta$$

$$\theta = 74.4^\circ$$

10)



$$\sin \theta = \frac{6}{16}$$

$$\sin^{-1}\left(\frac{6}{16}\right) = \theta$$

$$\theta = 22.0^\circ$$

-2-

Assignment:

Intro to Trigonometry

#1-24

*** show ALL steps ***