

Today's Plan:

Learning Target (standard): I will review polar coordinates & graphing polar equations.

Students will: Complete practice problems over previous concepts at the boards, put up homework problems on the board and make necessary corrections to their own work, take notes over new material and complete practice problems over new concepts.

Teacher will: Provide practice problems over previous concepts, check homework problems for accuracy and provide students feedback, describe and provide examples of review concepts and assign students assessment problems over review concepts.

Assessment: Board work, homework check and homework assignment

Differentiation: Students will work at the board, go over and correct homework at their seats, actively engage in lecture over review concepts, practice review concepts with the aid of other students and the teacher and complete homework assignment.

p.593 #30,34,38,46

30) limacon without inner loop

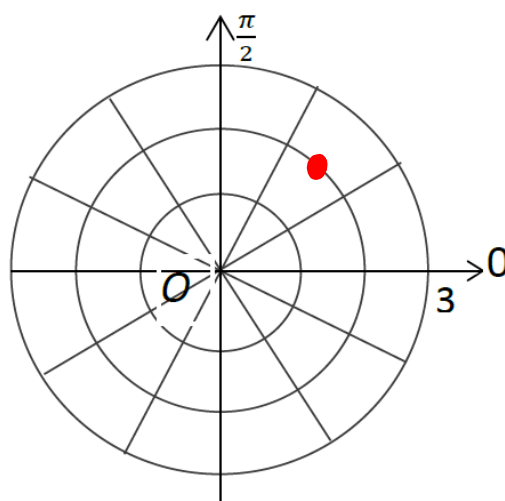
34) limacon with inner loop

38) rose with 4 petals

46) limacon without inner loop

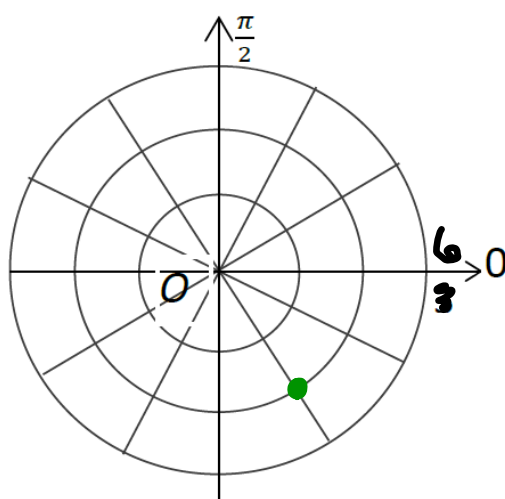
Plot the point with the given polar coordinates.

$$\left(-2, -\frac{3\pi}{4}\right)$$



Plot the point with the given polar coordinates.

$$\left(4, -\frac{\pi}{3}\right)$$



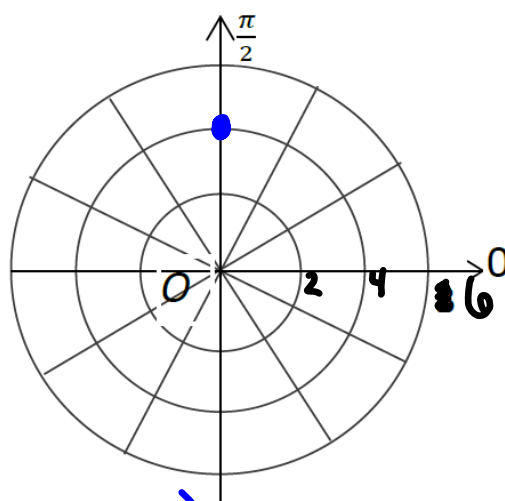
Find 3 pairs of polar coordinates that describe the same point as the provided polar coordinates.

$$(4, 90^\circ)$$

$$(-4, 270^\circ)$$

$$(4, -270^\circ)$$

$$(4, 450^\circ) \quad (-4, -90^\circ)$$



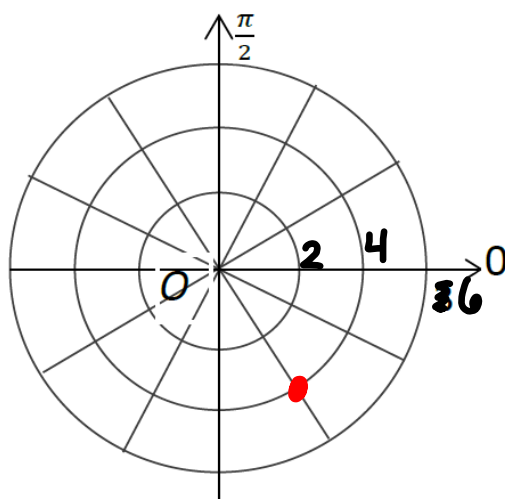
Find 3 pairs of polar coordinates that describe the same point as the provided polar coordinates.

$$\left(-4, -\frac{4\pi}{3}\right)$$

$$\left(4, \frac{5\pi}{3}\right)$$

$$\left(-4, \frac{2\pi}{3}\right)$$

$$\left(4, -\frac{\pi}{3}\right)$$



Convert each polar coordinates to rectangular coordinates.

$$(-4, -90^\circ)$$

$$x = r \cos \theta$$

$$x = -4 \cos(-90^\circ)$$

$$x = -4(0)$$

$$x = 0$$

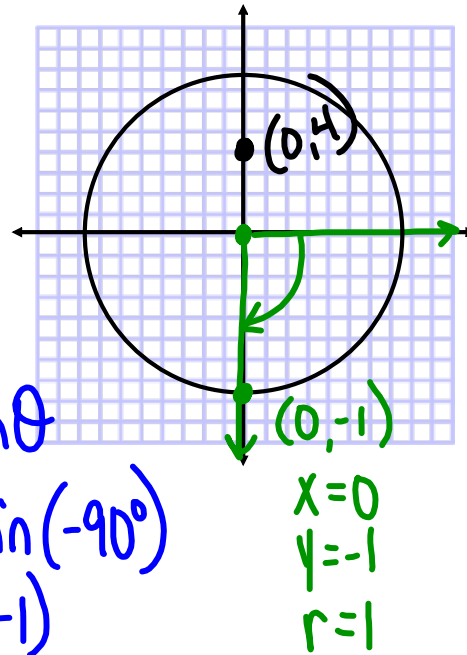
$$y = r \sin \theta$$

$$y = -4 \sin(-90^\circ)$$

$$y = -4(-1)$$

$$y = 4$$

$$(0, 4)$$



$$x = 0$$

$$y = -1$$

$$r = 1$$

Convert each pair polar coordinates to rectangular coordinates.

$$\left(-3, -\frac{\pi}{3}\right)$$

$$x = r \cos \theta$$

$$x = -3 \cos\left(-\frac{\pi}{3}\right)$$

$$x = -3\left(\frac{1}{2}\right)$$

$$x = -\frac{3}{2}$$

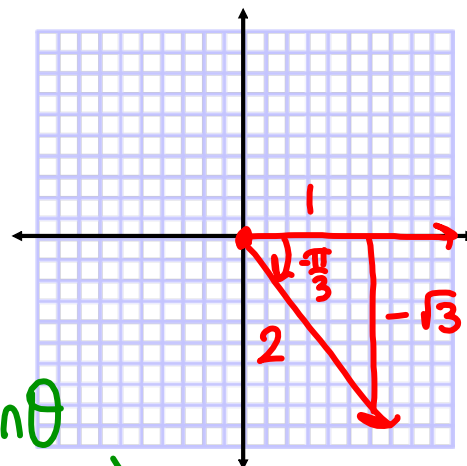
$$y = r \sin \theta$$

$$y = -3 \sin\left(-\frac{\pi}{3}\right)$$

$$y = -3\left(-\frac{\sqrt{3}}{2}\right)$$

$$y = \frac{3\sqrt{3}}{2}$$

$$\left(-\frac{3}{2}, \frac{3\sqrt{3}}{2}\right)$$



Convert each pair rectangular coordinates to polar coordinates.

$$\left(-\frac{3\sqrt{3}}{2}, \frac{3}{2} \right)$$

$$r^2 = x^2 + y^2$$

$$r^2 = \left(-\frac{3\sqrt{3}}{2} \right)^2 + \left(\frac{3}{2} \right)^2$$

$$= \frac{27}{4} + \frac{9}{4}$$

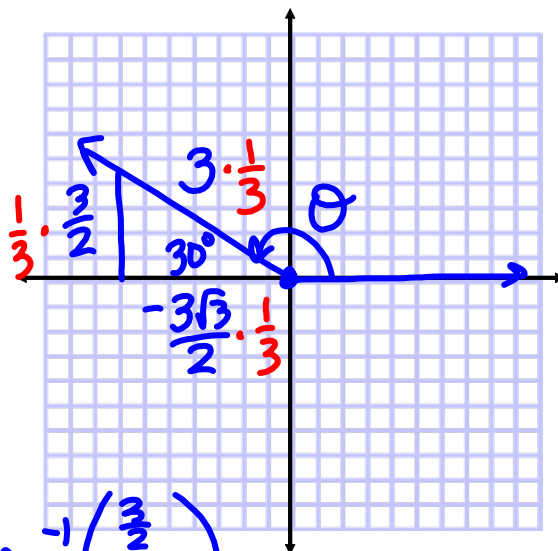
$$r^2 = 9$$

$$r = 3$$

$$\theta = \tan^{-1} \left(\frac{\frac{3}{2}}{-\frac{3\sqrt{3}}{2}} \right)$$

$$\theta = -\frac{\pi}{6}$$

$$\left(3, \frac{5\pi}{6} \right)$$



Convert each pair rectangular coordinates to polar coordinates.

$$\left(\frac{3\sqrt{2}}{2}, -\frac{3\sqrt{2}}{2} \right)$$

$$r^2 = x^2 + y^2$$

$$r^2 = \left(\frac{3\sqrt{2}}{2} \right)^2 + \left(-\frac{3\sqrt{2}}{2} \right)^2$$

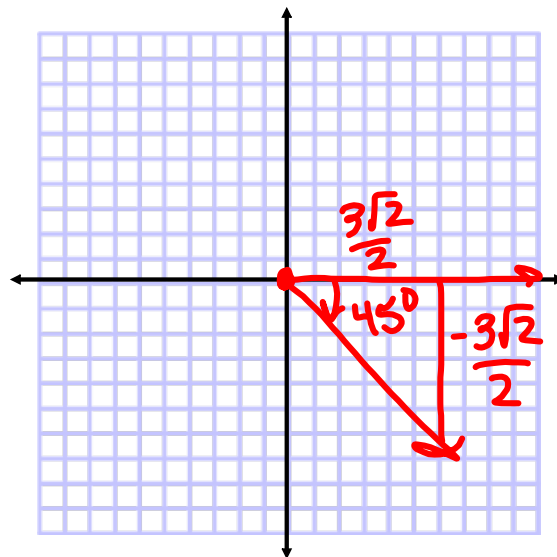
$$= \frac{18}{4} + \frac{18}{4}$$

$$r^2 = 9$$

$$r = 3$$

$$\theta = 315^\circ = \frac{7\pi}{4}$$

$$\left(3, \frac{7\pi}{4} \right) \text{ or } \left(3, -\frac{\pi}{4} \right)$$



Convert the equation from rectangular to polar form.

$$(x+2)^2 + (y+1)^2 = 5$$

$$x^2 + 4x + 4 + y^2 + 2y + 1 = 5$$

$$\underbrace{x^2 + y^2} + \underbrace{4x} + \underbrace{2y} = 0$$

$$r^2 + 4r\cos\theta + 2r\sin\theta = 0$$

$$r^2 = -4r\cos\theta - 2r\sin\theta$$

$$r = -4\cos\theta - 2\sin\theta$$

Convert the equation from rectangular to polar form.

$$(x-1)^2 + (y+3)^2 = 10$$

$$x^2 - 2x + 1 + y^2 + 6y + 9 = 10$$

$$\underbrace{x^2 + y^2} - \underbrace{2x} + \underbrace{6y} = 0$$

$$r^2 - 2r\cos\theta + 6r\sin\theta = 0$$

$$r^2 = 2r\cos\theta - 6r\sin\theta$$

$$r = 2\cos\theta - 6\sin\theta$$

Convert the equation from polar to rectangular form.
Identify the type of graph.

$$r = -6\sin\theta$$

$$r^2 = -6r\sin\theta$$

$$x^2 + y^2 = -6y$$

$$x^2 + y^2 + 6y + 9 = +9$$

$$x^2 + (y+3)^2 = 9$$

Circle C: (0, -3)
r = 3

Convert the equation from polar to rectangular form.
Identify the type of graph.

$$r = 2\cot\theta\csc\theta$$

$$r = 2\left(\frac{\cos\theta}{\sin\theta}\right)\left(\frac{1}{\sin\theta}\right)$$

$$r = 2\left(\frac{\cos\theta}{\sin^2\theta}\right)$$

$$r\sin^2\theta = 2\cos\theta$$

$$r^2\sin^2\theta = 2r\cos\theta$$

$$(r\sin\theta)^2 = 2r\cos\theta$$

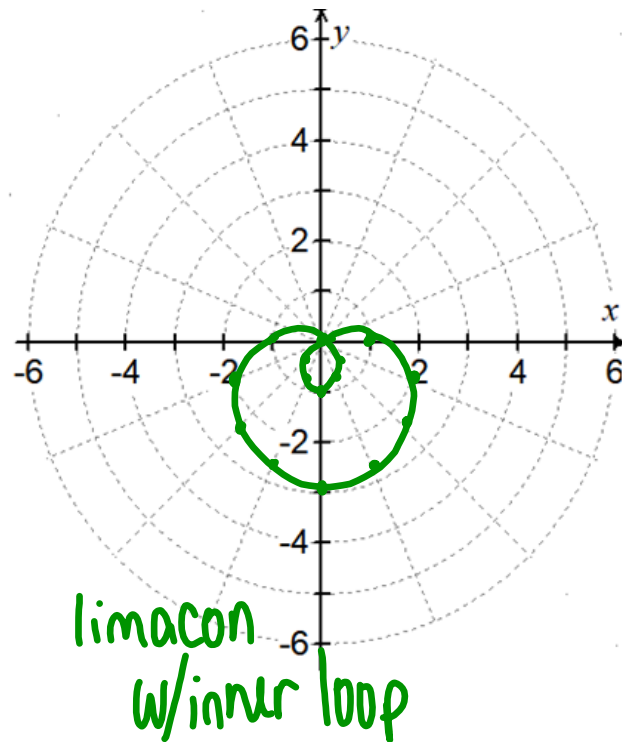
$$y^2 = 2x$$

or $x = \frac{1}{2}y^2$ (parabola that opens right)

Graph the polar equation.

$$r = 1 - 2 \sin \theta$$

θ	r	θ	r
0	1	π	1
$\frac{\pi}{6}$	0	$\frac{7\pi}{6}$	2
$\frac{\pi}{4}$	-.414	$\frac{5\pi}{4}$	2.414
$\frac{\pi}{3}$	-.732	$\frac{4\pi}{3}$	2.732
$\frac{\pi}{2}$	-1	$\frac{3\pi}{2}$	3
$\frac{2\pi}{3}$	-.732	$\frac{5\pi}{3}$	2.732
$\frac{3\pi}{4}$	-.414	$\frac{7\pi}{4}$	2.414
$\frac{5\pi}{6}$	0	$\frac{11\pi}{6}$	2
π	1	2π	1



Assignment:

QUIZ Monday, May 13

Polar Coordinates Review

#1-14

Polar Coordinates Review

3) $(-3, 90^\circ), (3, -90^\circ), (3, 270^\circ)$

4) $\left(4, \frac{5\pi}{6}\right), \left(4, -\frac{7\pi}{6}\right), \left(-4, \frac{11\pi}{6}\right)$

5) $(-\sqrt{3}, -1)$

6) $(-2\sqrt{2}, 2\sqrt{2})$

7) $\left(1, \frac{3\pi}{4}\right)$

8) $\left(3, \frac{11\pi}{6}\right)$

9) $r = -4\cos\theta$

10) $r = -2\cos\theta + 2\sin\theta$

11) $y = \frac{1}{4}x^2$

12) $(x-1)^2 + y^2 = 1$

13) limaçon with inner loop

14) rose with 3 petals